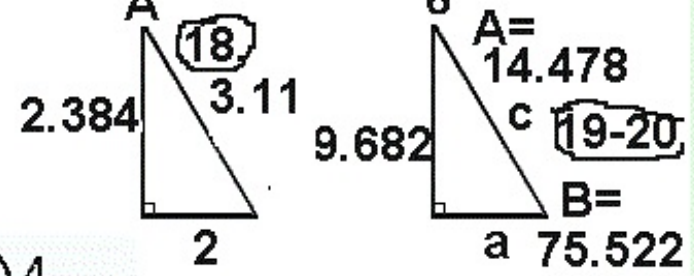
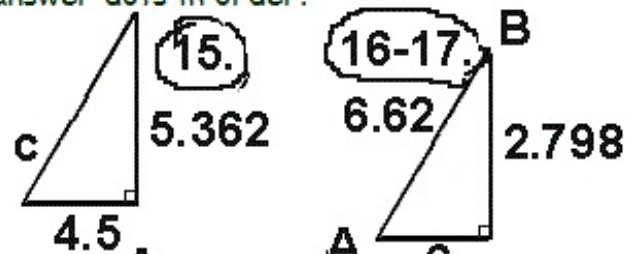
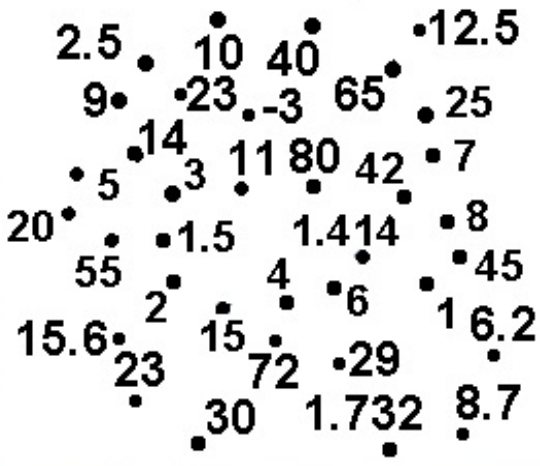


Find Sides & Angles of a Right Triangle & a Reward for Hot Work **CALCULATOR REQUIRED!**

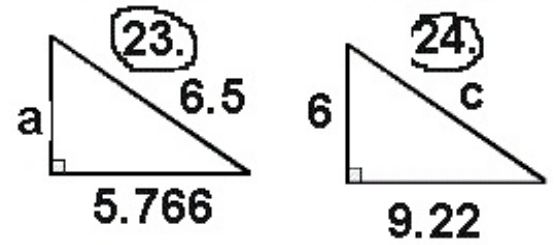
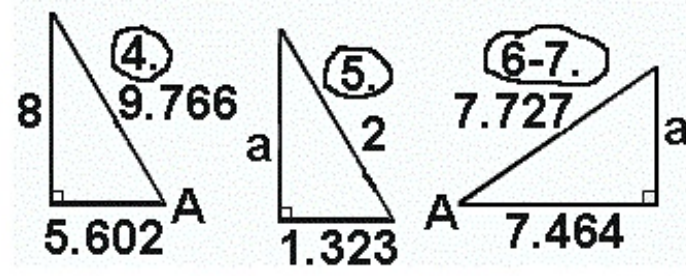
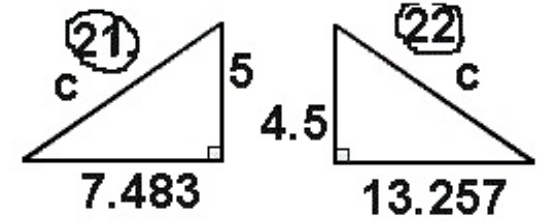
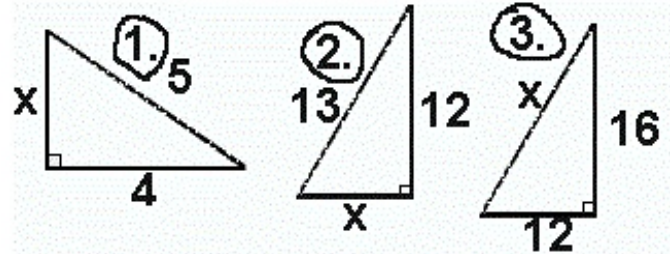
Start a new line.

Connect the answer dots in order.

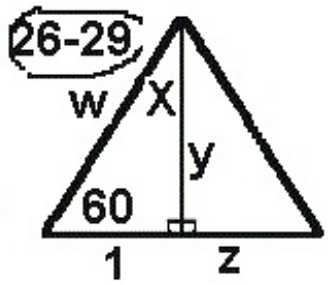
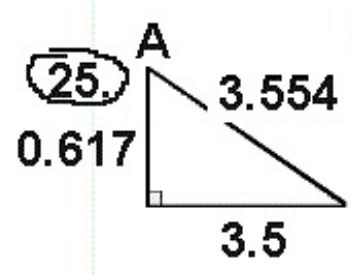
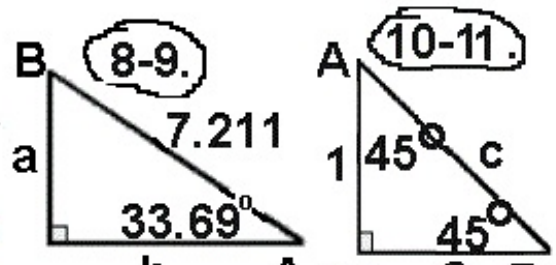
1. a = _____
2. a = _____
3. c = _____
4. A = _____
5. a = _____
6. a = _____
7. A = _____
8. b = _____
9. a = _____
10. c = _____



11. a = _____
12. A = _____
13. b = _____
14. A = _____
15. c = _____
16. A = _____
17. B = _____
18. A = _____
19. c = _____
20. a = _____
21. c = _____
22. a = _____



23. c = _____
24. c = _____
25. A = _____



Start a new line.

26. w = _____
27. X = _____
28. y = _____
29. z = _____

